

Notes in the Bass Clef

Q. Name the pitch of the following notes up to one ledger line.

a) 


.....

b) 

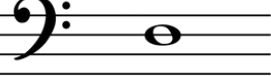
.....

c) 

.....

d) 

.....

e) 


.....

f) 

.....

g) 

.....

h) 

.....

i) 

.....

j) 


.....

k) 


.....

l) 

.....

m) 

.....

n) 

.....

o) 

.....

p) 

.....

q) 

.....

r) 

.....

s) 


.....


t) 


.....


Notes in the Bass Clef


Q. Name the pitch of the following notes up to one ledger line.


a) 
 Ab


b) 
 C#


c) 
 A


d) 
 B


e) 
 D


f) 
 A#

g) 
 Db


h) 
 F


i) 
 C


j) 
 E


k) 
 Ab


l) 
 G#


m) 
 D


n) 
 Eb


o) 
 F

p) 
 B

q) 
 A#

r) 
 Eb

s) 
 D#

t) 
 G#
