

# Notes in the Bass Clef

Q. Name the pitch of the following notes up to one ledger line.

a) 

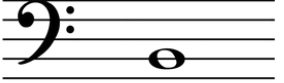
.....

b) 

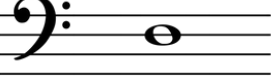
.....

c) 

.....

d) 

.....

e) 


.....

f) 

.....

g) 

.....

h) 

.....

i) 

.....

j) 


.....

k) 

.....

l) 

.....

m) 

.....

n) 

.....

o) 

.....

p) 

.....

q) 

.....

r) 

.....

s) 


.....

t) 

.....

# Notes in the Bass Clef


Q. Name the pitch of the following notes up to two ledger lines.

a) 

.....

b) 

.....

c) 

.....

d) 

.....

e) 

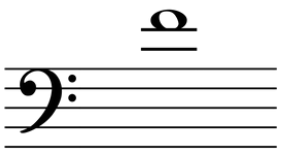
.....

f) 

.....

g) 

.....

h) 


.....

i) 

.....

j) 


.....

k) 

.....

l) 

.....

m) 

.....

n) 

.....

o) 

.....

p) 

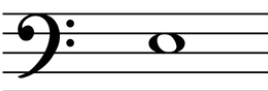
.....

q) 

.....

r) 

.....

s) 

.....

t) 

.....

# Notes in the Bass Clef

Q. Name the pitch of the following notes up to three ledger lines.

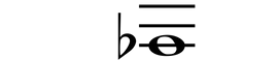
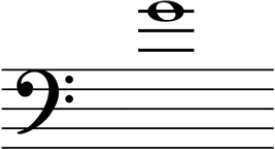
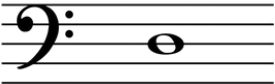
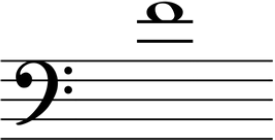
a)  b)  c)  d) 

.....

.....

.....

.....




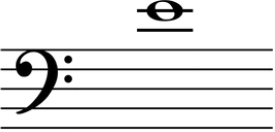
e)  f)  g)  h) 

.....

.....

.....

.....





i)  j)  k)  l) 

.....

.....

.....

.....





m)  n)  o)  p) 

.....

.....

.....

.....

q)  r)  s)  t) 

.....

.....

.....

.....

# Answers


Q. Name the pitch of the following notes up to one ledger line.


a)   
 Ab  
 .....

b)   
 C#  
 .....


c)   
 A  
 .....


d)   
 B  
 .....


e)   
 D  
 .....


f)   
 A#  
 .....

g)   
 Db  
 .....


h)   
 F  
 .....


i)   
 C  
 .....


j)   
 E  
 .....


k)   
 Ab  
 .....

l)   
 G#  
 .....

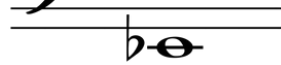
m)   
 D  
 .....


n)   
 Eb  
 .....


o)   
 F  
 .....

p)   
 B  
 .....

q)   
 A#  
 .....


r)   
 Eb  
 .....


s)   
 D#  
 .....

t)   
 G#  
 .....

# Answers

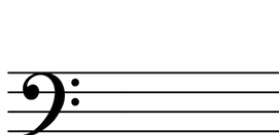
Q. Name the pitch of the following notes up to two ledger lines.

a)    
 Eb

b)    
 B


c)    
 F


d)    
 G#

e)    
 C


f)    
 G#

g)    
 Ab


h)    
 F

i)    
 B


j)    
 D#


k)    
 B


l)    
 G#

m)    
 C#

n)    
 Db


o)    
 C#

p)    
 Eb

q)    
 Bb






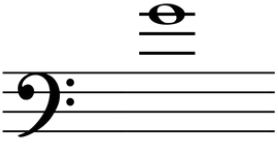

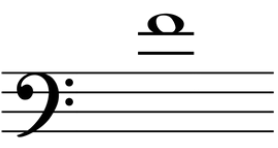



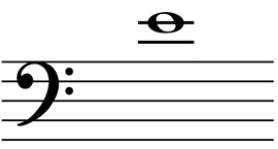








r)    
 A#

s)    
 E

t)    
 Bb

# Answers

Q. Name the pitch of the following notes up to three ledger lines.

<p>a) </p> <p style="text-align: center;">A .....</p>	<p>b) </p> <p style="text-align: center;">D# .....</p>	<p>c) </p> <p style="text-align: center;">C .....</p>	<p>d) </p> <p style="text-align: center;">Ab .....</p>
<p>e) </p> <p style="text-align: center;">Ab .....</p>	<p>f) </p> <p style="text-align: center;">G .....</p>	<p>g) </p> <p style="text-align: center;">D .....</p>	<p>h) </p> <p style="text-align: center;">F .....</p>
<p>i) </p> <p style="text-align: center;">F .....</p>	<p>j) </p> <p style="text-align: center;">Gb .....</p>	<p>k) </p> <p style="text-align: center;">G .....</p>	<p>l) </p> <p style="text-align: center;">E .....</p>
<p>m) </p> <p style="text-align: center;">F# .....</p>	<p>n) </p> <p style="text-align: center;">Eb .....</p>	<p>o) </p> <p style="text-align: center;">G .....</p>	<p>p) </p> <p style="text-align: center;">F# .....</p>
<p>q) </p> <p style="text-align: center;">Bb .....</p>	<p>r) </p> <p style="text-align: center;">Gb .....</p>	<p>s) </p> <p style="text-align: center;">Gb .....</p>	<p>t) </p> <p style="text-align: center;">A# .....</p>